

國立台灣海洋大學河海工程學系工程數學(二) 2B 班第一次大考解答

1. Define zero order Bessel function $J_0(t)$ which is one of the solution for

$$t\ddot{y}(t) + \dot{y}(t) + ty(t) = 0, \tag{1}$$

Solve $L\{J_0(t)\}$. (10%) **解 1.** $1/\sqrt{s^2 + 1}$

2. $J_0(t)$ can be expressed by

$$J_0(t) = \sum_{m=0}^{\infty} \frac{(-1)^m}{2^m (m!)^2} t^{2m}, \quad \text{解 2. } \sum_{m=0}^{\infty} \frac{(-1)^m (2m)!}{2^m (m!)^2 s^{2m+1}} \tag{2}$$

Determine the series form for $L\{J_0(t)\}$. (10%)

3. Compare the solutions 1. with 2., and prove that they are the same. (10%) **解 3. 略**

4. By using the Laplace transform, solve the integral equation for $y(t)$

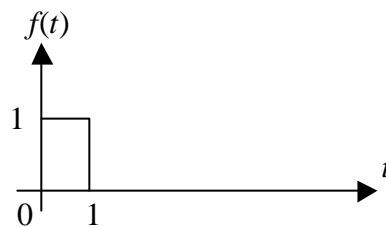
$$y(t) = t^3 + \int_0^t \sin(t - \mathbf{t})y(\mathbf{t})d\mathbf{t}. \tag{10\%} \quad \text{解 4. } y(t) = t^3 + \frac{1}{20}t^5 \tag{3}$$

5. Given a function $f(t)$,

$$f(t) = \begin{cases} 1, & 0 < t < 1 \\ 0, & \text{otherwise} \end{cases}$$

determine $f(t) * f(t)$. (10%)

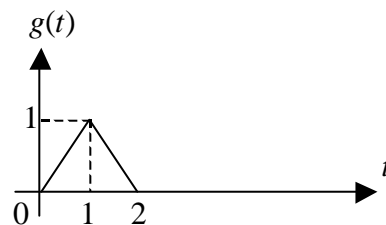
解 5. $f(t) * f(t) = g(t)$



6. Given a function $g(t)$,

$$g(t) = \begin{cases} t, & 0 < t < 1 \\ 2 - t, & 1 < t < 2 \\ 0, & \text{otherwise} \end{cases}$$

determine $L\{g(t)\}$. (10%)

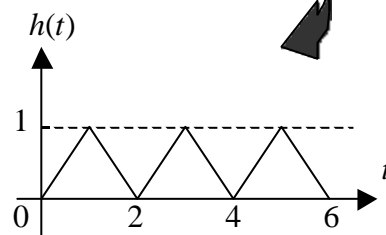


解 6. $(1 - e^{-s})^2 / s^2$

7. Given a function $h(t)$,

determine $L\{h(t)\}$. (10%)

解 7. $\frac{1 - e^{-s}}{s^2(1 + e^{-s})}$



8. Explain the initial and final theorems in Laplace transform. (10%) **解 8. 略**

9. Determine $L\{\mathbf{d}(t - 3)\}$ and $L\{H(t - 3)\}$, where \mathbf{d} and H are the Dirac-Delta

function and Heaviside function, respectively. (10%) **解 9.** $e^{-3s}, (1/s)e^{-3s}$

10. Determine $L^{-1}\left\{\ell n \frac{s+a}{s-a}\right\}$. (10%) **解 10.** $\frac{1}{t}(e^{at} - e^{-at})$