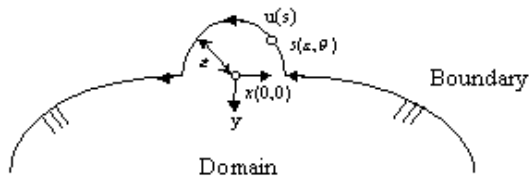


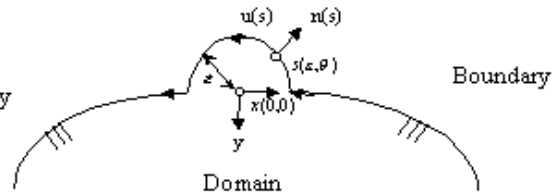
國立台灣海洋大學河海工程研究所 BEM 第 7 次作業

1. According to the paper in J. Marine Science & Technology, find and correct the mistakes in pp. 103-106 of BEM textbook.

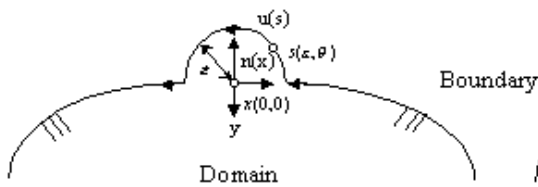
(a) $U(s, x)$



(b) $T(s, x)$



(c) $L(s, x)$



(d) $M(s, x)$

