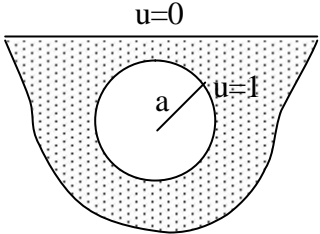
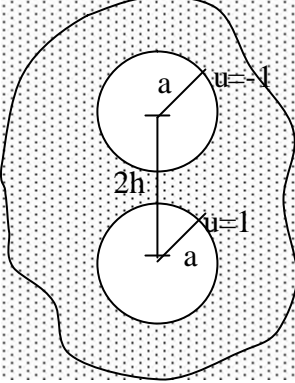
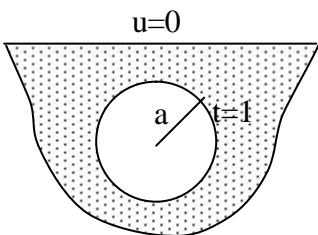
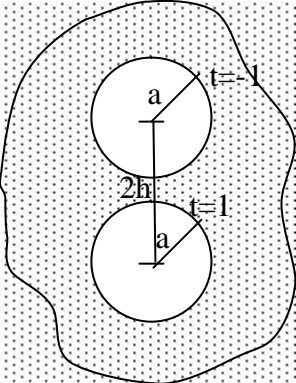
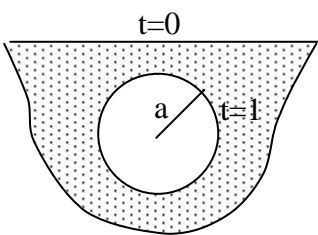
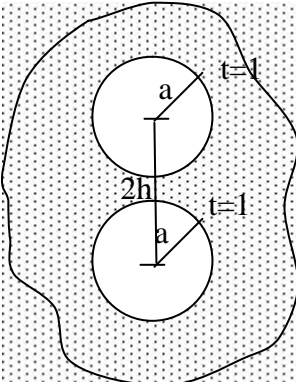


程式 98 半平面與全平面含圓洞問題

$$G.E. \quad (\nabla^2 + k^2)u = 0 \quad k = 0.0059$$

	Half-plane	Infinite-plane
<b>Dirichlet</b>	 <p style="text-align: right; margin-right: 20px;"><math>a=1</math></p>	 <p style="text-align: right; margin-right: 20px;"><math>a=1</math> <math>h=5</math></p>
<b>Mixed-typed</b>	 <p style="text-align: right; margin-right: 20px;"><math>a=1</math></p>	 <p style="text-align: right; margin-right: 20px;"><math>a=1</math> <math>h=5</math></p>
<b>Neumann</b>	 <p style="text-align: right; margin-right: 20px;"><math>a=1</math></p>	 <p style="text-align: right; margin-right: 20px;"><math>a=1</math> <math>h=5</math></p>

